

OXFORD CAMBRIDGE AND RSA EXAMINATIONS
AS GCE
4736/01
MATHEMATICS
Decision Mathematics 1
PRINTED ANSWER BOOK
WEDNESDAY 13 JUNE 2018: Morning
DURATION: 1 hour 30 minutes
plus your additional time allowance
MODIFIED ENLARGED 36pt

Candidate forename						Candidate surname					
Centre number						Candidate number					

Candidates answer on this Printed Answer Book.

OCR SUPPLIED MATERIALS:
Question Paper 4736/01
List of Formulae (MF1) sent with standard paper

OTHER MATERIALS REQUIRED:
Scientific or graphical calculator

READ INSTRUCTIONS OVERLEAF

INSTRUCTIONS TO CANDIDATES

These instructions are the same on the Printed Answer Book and the Question Paper.

Write your name, centre number and candidate number in the spaces provided on the Printed Answer Book. Please write clearly and in capital letters.

WRITE YOUR ANSWER TO EACH QUESTION IN THE SPACE PROVIDED IN THE PRINTED ANSWER BOOK.

If additional space is required, you should use the lined page(s) at the end of the Printed Answer Book. The question number(s) must be clearly shown.

Use black ink. HB pencil may be used for graphs and diagrams only.

Answer ALL the questions.

Read each question carefully. Make sure you know what you have to do before starting your answer.

You are permitted to use a scientific or graphical calculator in this paper.

Give non-exact numerical answers correct to 3 significant figures unless a different degree of accuracy is specified in the question or is clearly appropriate.

INFORMATION FOR CANDIDATES

This information is the same on the Printed Answer Book and the Question Paper.

The number of marks is given in brackets [] at the end of each question or part question on the Question Paper.

YOU ARE REMINDED OF THE NEED FOR CLEAR PRESENTATION IN YOUR ANSWERS.

The total number of marks for this paper is 72.

1 (i)

Shop	A	B	C	D	E	F	G	H
Boxes	500	400	600	300	300	400	300	200

Van 1:

Van 2:

Van 3:

Van 4:

1 (ii)

Shop	A	B	C	D	E	F	G	H
Boxes	500	400	600	300	300	400	300	200

Van 1:

Van 2:

Van 3:

Van 4:

1 (iii)																										
<table><tr><td>Shop</td><td>A</td><td>B</td><td>C</td><td>D</td><td>E</td><td>F</td><td>G</td><td>H</td></tr><tr><td>Boxes</td><td>500</td><td>400</td><td>600</td><td>300</td><td>300</td><td>400</td><td>300</td><td>200</td></tr></table>									Shop	A	B	C	D	E	F	G	H	Boxes	500	400	600	300	300	400	300	200
Shop	A	B	C	D	E	F	G	H																		
Boxes	500	400	600	300	300	400	300	200																		
Van 1:																										
Van 2:																										
Van 3:																										
1 (iv)																										

2 (i)			
	<i>M</i>	<i>N</i>	<i>P</i>

2 (ii)

[illegible]

3 (iii)

(continued)

A spare copy of this diagram can be found below.

<i>P</i>	<i>x</i>	<i>y</i>	<i>s</i>	<i>t</i>	<i>u</i>	RHS

Spare copy of the diagram for question 3(iii).

<i>P</i>	<i>x</i>	<i>y</i>	<i>s</i>	<i>t</i>	<i>u</i>	RHS

3 (iv)	$P =$ _____	$x =$ _____
	$y =$ _____	$s =$ _____
	$t =$ _____	$u =$ _____
3 (v)		

4 (i)	

4 (ii)

M

N

P

$$R$$

S

M

N

P

$$R$$

S

6

7

5

4

3

2

3

4

2

4

Arcs used (in order of being chosen)

Tree

Total weight

M.

$\bullet N$

S.

$\cdot P$

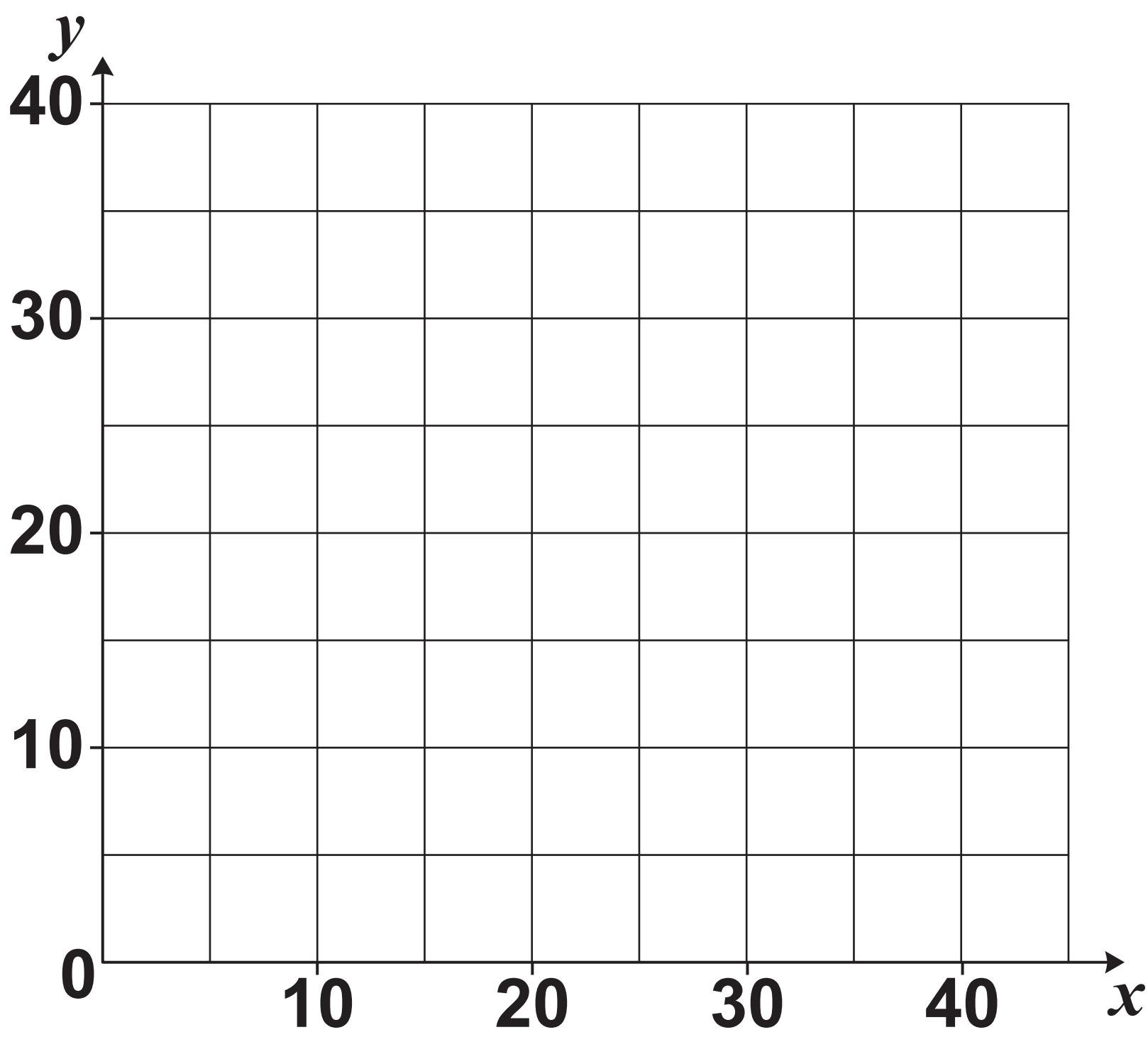
 \dot{R}

4 (iii)	$x =$
4 (iv)	$x =$
4 (v)	
4 (vi)	
	Upper bound =

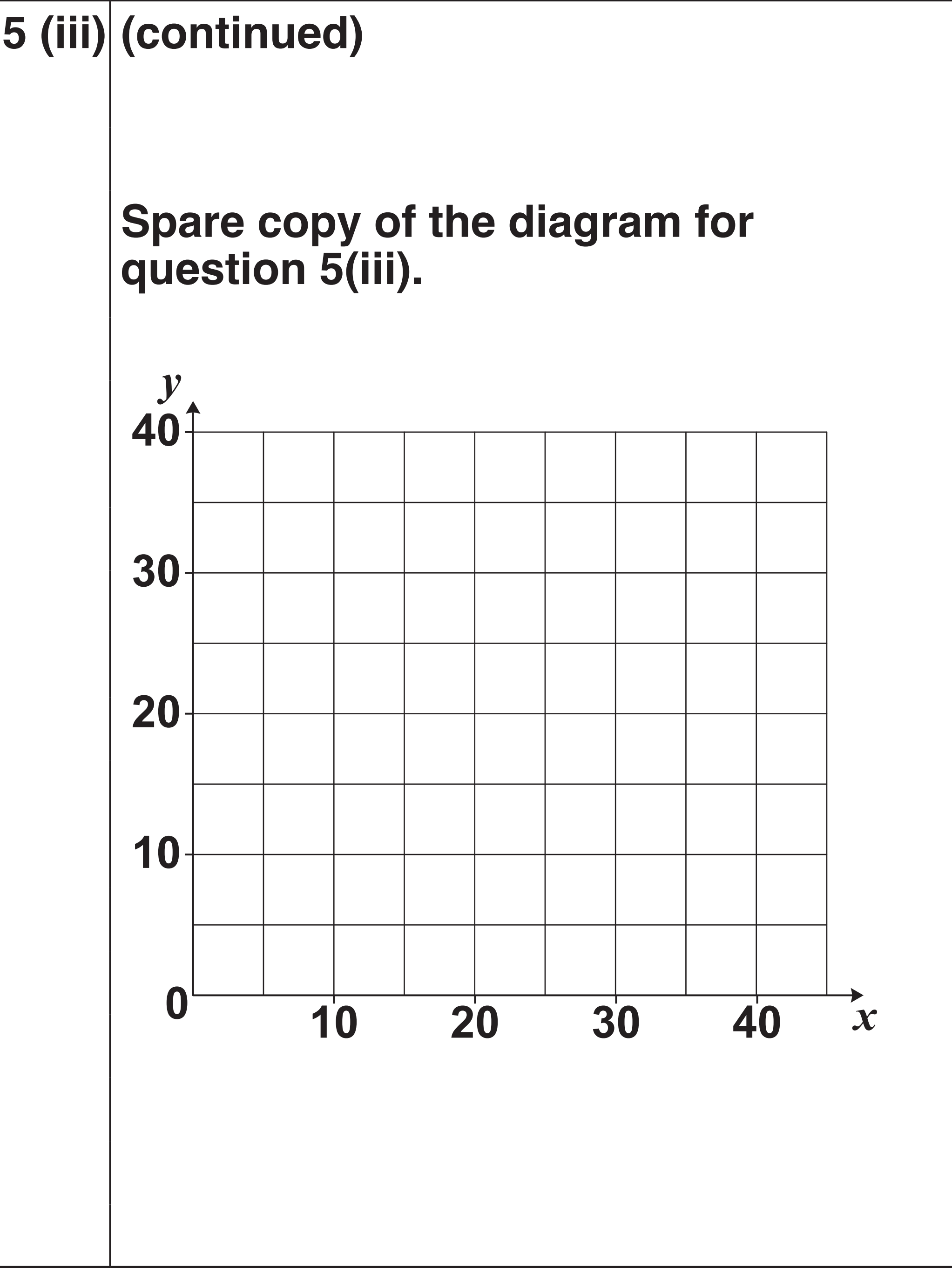
4 (vii)	<div> <div>$M.$</div> <div>$.N$</div> <div>$U.$</div> <div>$.P$</div> <div>$S.$</div> <div>$.R$</div> </div>
4 (viii)	<div> <div>$M.$</div> <div>$.N$</div> <div>$U.$</div> <div>$.P$</div> <div>$S.$</div> <div>$.R$</div> </div>

5 (i)	$3x + 4y \leq 120$ because
	Other constraints (apart from x and y being integers)
5 (ii)	$P =$

5 (iii) A spare copy of this diagram can be found on page 17.

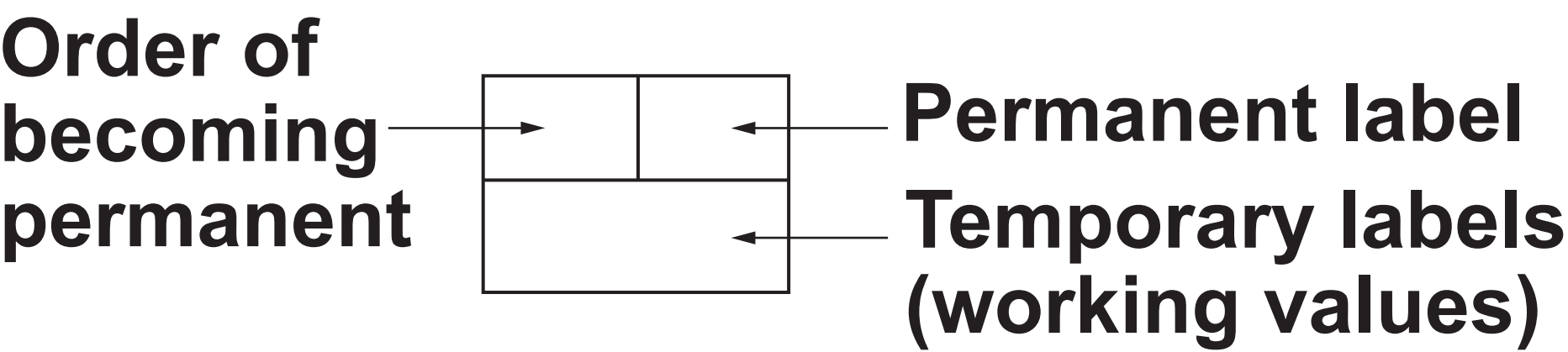


(answer space continued on next page)

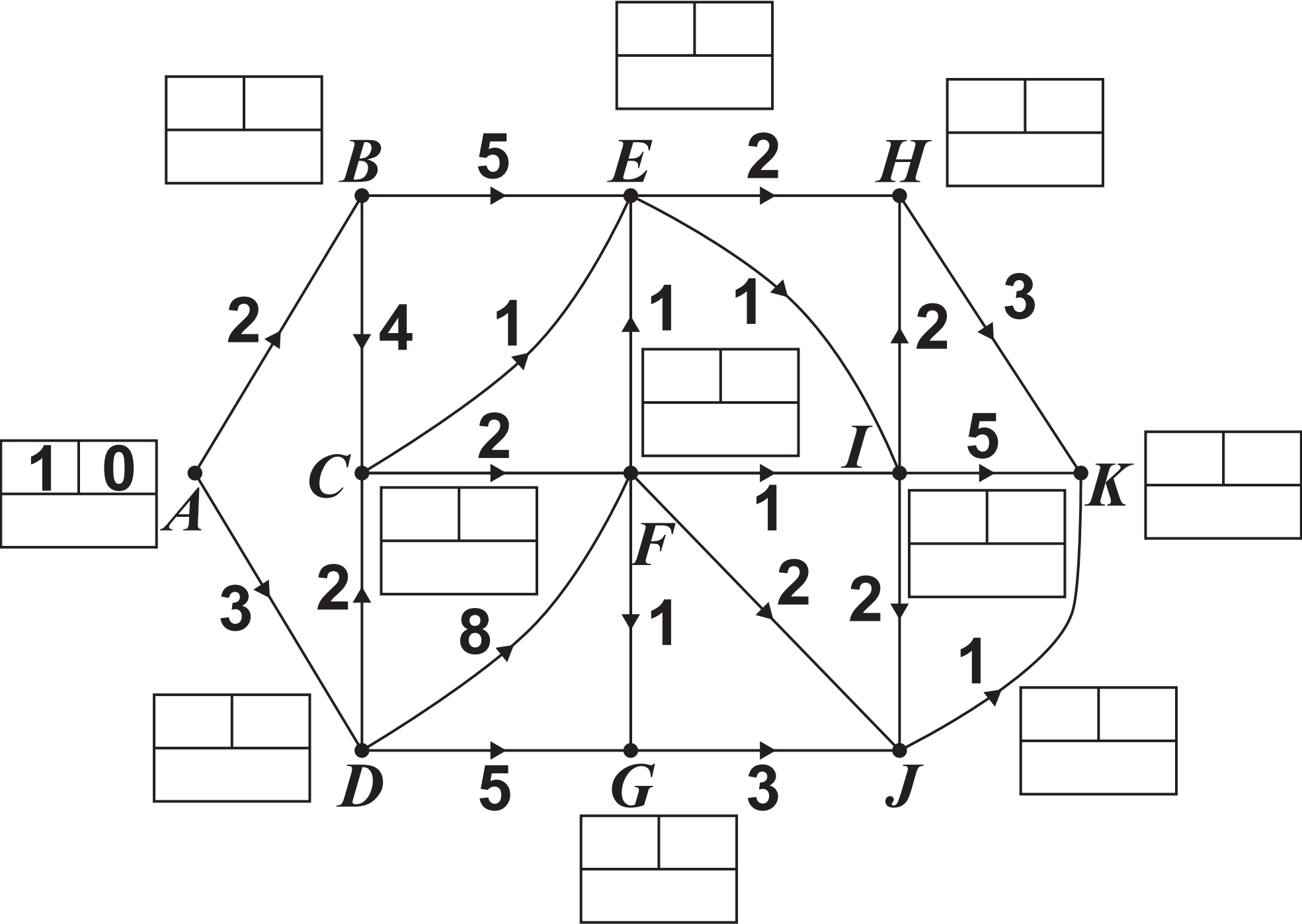


5 (iv)	
	Small jars
	Large jars
5 (v)	
	Profit £

6(a)(i) | Key:



Do not cross out your temporary labels.



Shortest distance: (in units of 100 m)
Route(s):

6 (a)(ii)	
	Shortest distance: (in units of 100 m)
	Route(s):

6 (b)(i)	
	Minimum distance =
	(in units of 100 m)
	Arcs that represent repeated roads:

6 (b)(ii)	
	Minimum distance = (in units of 100 m)
	Number of times through F =

ADDITIONAL ANSWER SPACE

If additional space is required, you should use the following lined page(s). The question number(s) must be clearly shown in the margin(s).



Copyright Information

OCR is committed to seeking permission to reproduce all third-party content that it uses in its assessment materials. OCR has attempted to identify and contact all copyright holders whose work is used in this paper. To avoid the issue of disclosure of answer-related information to candidates, all copyright acknowledgements are reproduced in the OCR Copyright Acknowledgements Booklet. This is produced for each series of examinations and is freely available to download from our public website (www.ocr.org.uk) after the live examination series.

If OCR has unwittingly failed to correctly acknowledge or clear any third-party content in this assessment material, OCR will be happy to correct its mistake at the earliest possible opportunity.

For queries or further information please contact the Copyright Team, First Floor, 9 Hills Road, Cambridge CB2 1GE.

OCR is part of the Cambridge Assessment Group; Cambridge Assessment is the brand name of University of Cambridge Local Examinations Syndicate (UCLES), which is itself a department of the University of Cambridge.